

Test: 2018 Primary 2 - Term 1 (CA1) Math (Tao Nan)

Points: 10 points

Name: _____

Score: _____

Date: _____

Signature: _____

Select multiple choice answers with a cross or tick:

☐ Only select one answer

☐ Can select multiple answers

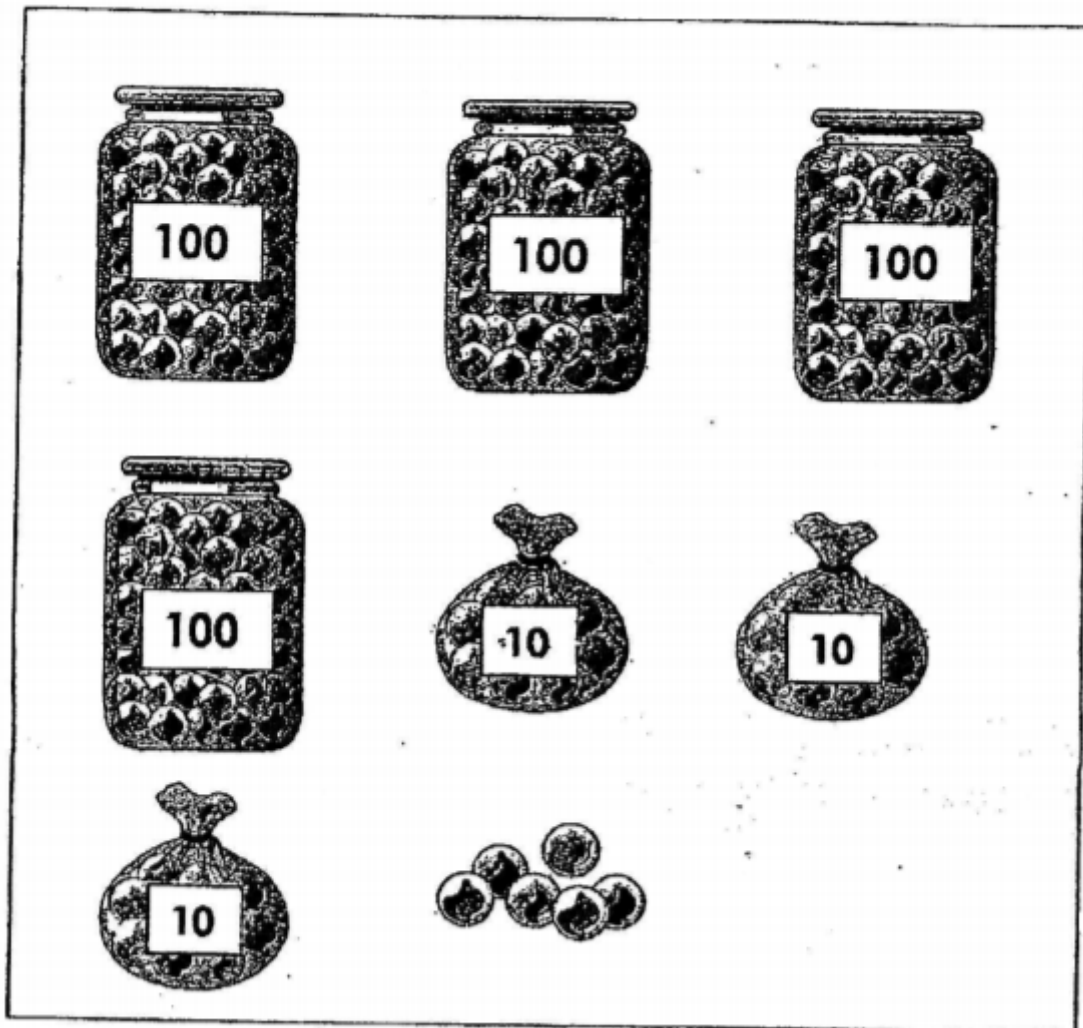
Question 1 of 10

Primary 2 Math (Term 1)

1 pt

Read the questions carefully.Write the correct answers (1 mark each).

How many marbles are there altogether? Type the answer in numerical.

**Question 2 of 10**

Primary 2 Math (Term 1)

1 pt

Write in words.

793

Question 3 of 10

Primary 2 Math (Term 1)

1 pt

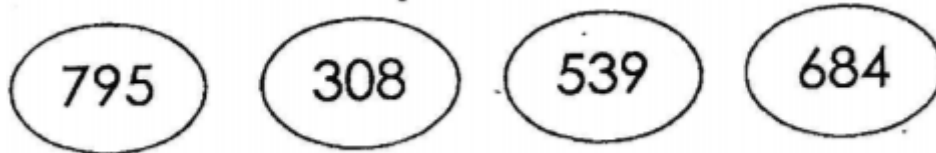
In 561, the value of the digit 5 is _____.

Question 4 of 10

Primary 2 Math (Term 1)

1 pt

Look at the numbers below.



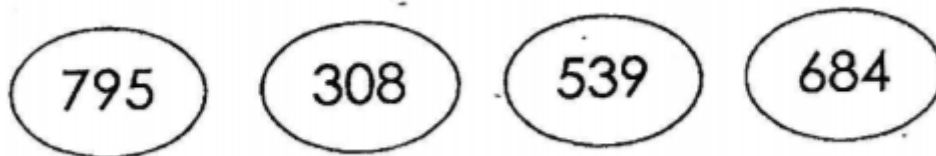
The greatest even number is _____.

Question 5 of 10

Primary 2 Math (Term 1)

1 pt

Look at the numbers below.



The odd number smaller than 700 is _____.

Question 6 of 10

Primary 2 Math (Term 1)

1 pt

_____ - 20 = 348

Question 7 of 10

Primary 2 Math (Term 1)

1 pt

10 **more** than 567 is _____.

Question 8 of 10

Primary 2 Math (Term 1)

1 pt

$$\begin{array}{r} 637 \\ + 53 \\ \hline \square \square \square \\ \hline \end{array}$$

Question 9 of 10

Primary 2 Math (Term 1)

1 pt

$$\begin{array}{r} 563 \\ - 182 \\ \hline \square \square \square \\ \hline \end{array}$$

$$\begin{array}{r} 840 \\ - 3\boxed{}4 \\ \hline 486 \end{array}$$
